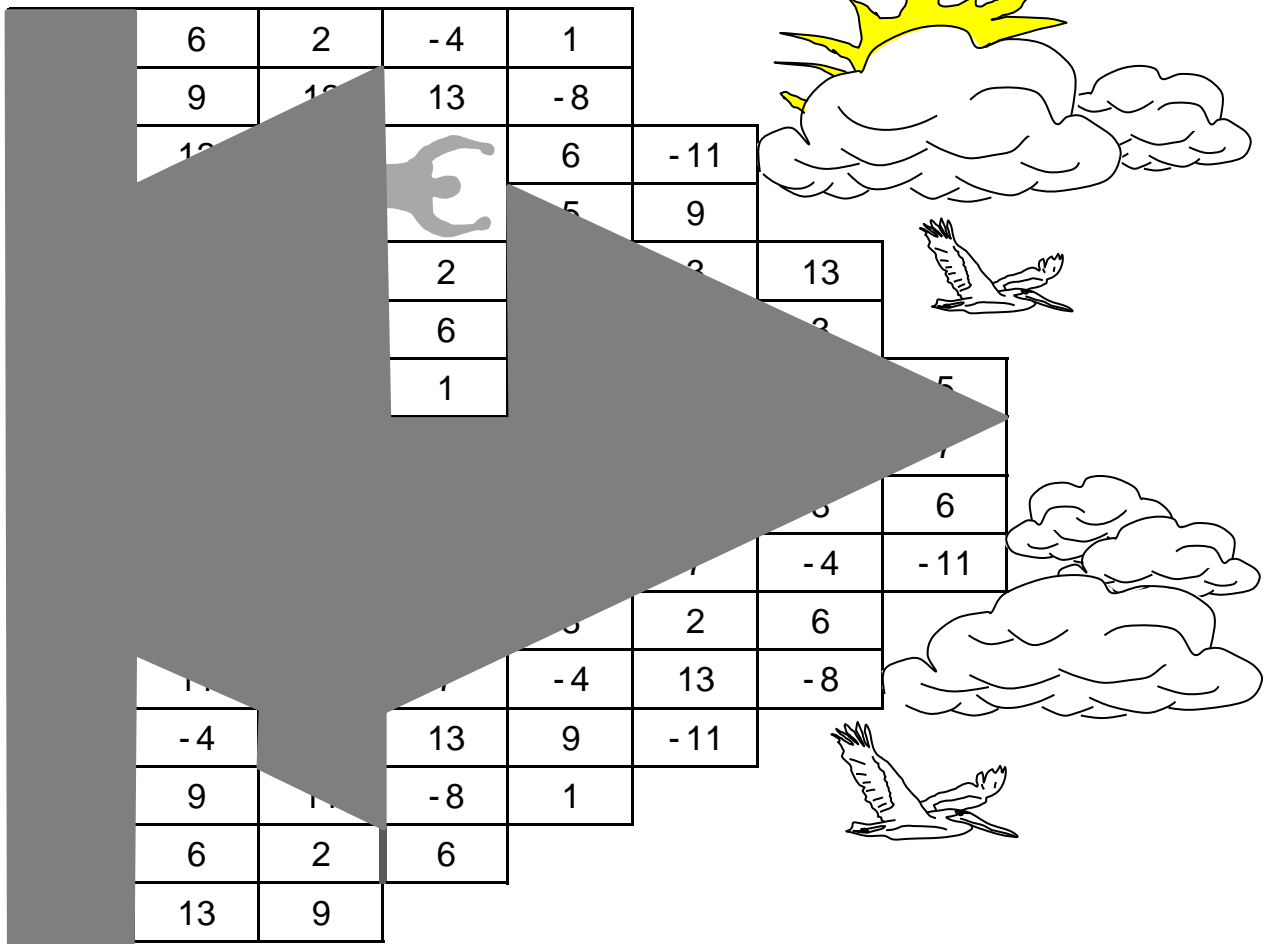




**ANSWER, FIND, AND SHADE
MULTI-STEP EQUATIONS**


ANSWERS


What if the world was flat?





 $f - 8 = -20 - f$
 $f = -6$


 $2(3v - 5) = 15 + v$
 $v = 5$


 $6(d + 1) = -24$
 $d = -5$


 $\frac{2z + 5}{-7} = -3$
 $z = 8$


 $4(n - 2) = 5(n + 4)$
 $n = -28$


 $2h = \frac{10h}{11} + 12$
 $h = 11$


 $3e + 1 = -8(7 + 2e)$
 $e = -3$

 $-11x - 6(-4 - 2x) = 36$
 $x = 12$

 $10 - 6c = -104$
 $c = 19$

 $2(5y - 3) - 8 = 4 + 4y$
 $y = 3$

 $k + 4 = \frac{7k - 4}{3}$
 $k = 4$

 $\frac{5t - 11}{4} = 13 - t$
 $t = 7$