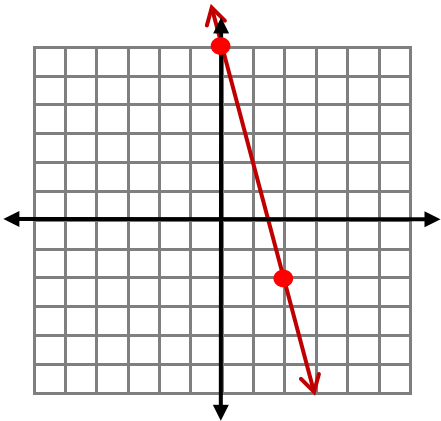


GRAPHING LINEAR EQUATIONS

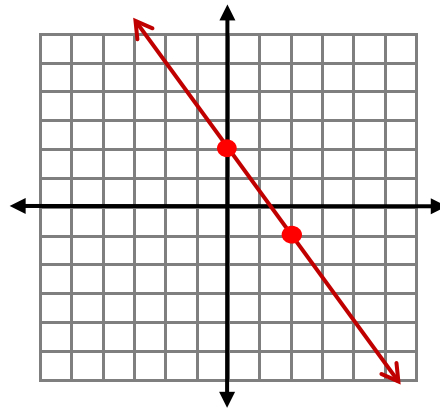
ANSWERS

Write each equation in *SLOPE-INTERCEPT FORM* and graph the line.

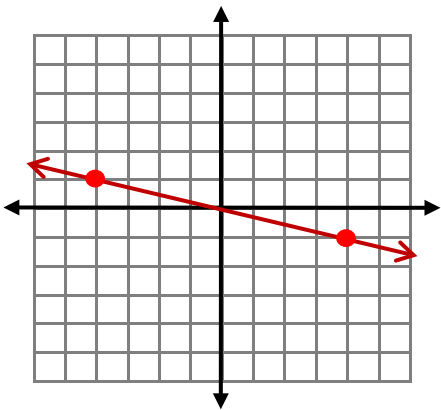
1. $y = 6 - 4x \rightarrow y = -4x + 6$



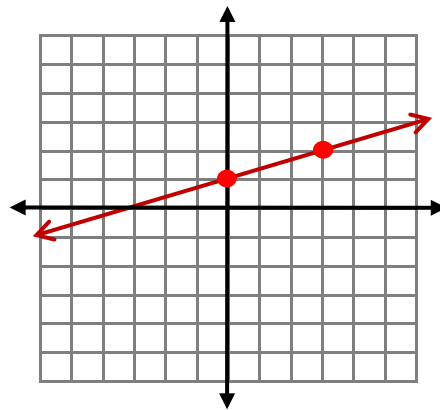
2. $2y = -3x + 4 \rightarrow y = -\frac{3}{2}x + 2$



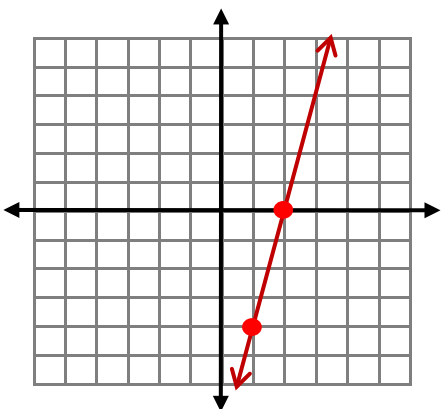
3. $x = -4y \rightarrow y = -\frac{1}{4}x$



4. $3y = 3 + x \rightarrow y = \frac{1}{3}x + 1$



5. $x = \frac{1}{4}y + 2 \rightarrow y = 4x - 8$



6. $\frac{1}{3}y = 6 - 3x \rightarrow y = -9x + 18$

