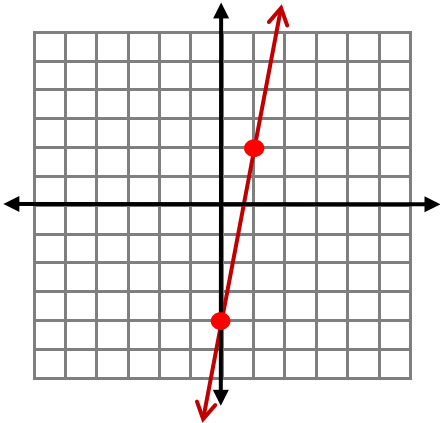


# GRAPHING LINEAR EQUATIONS

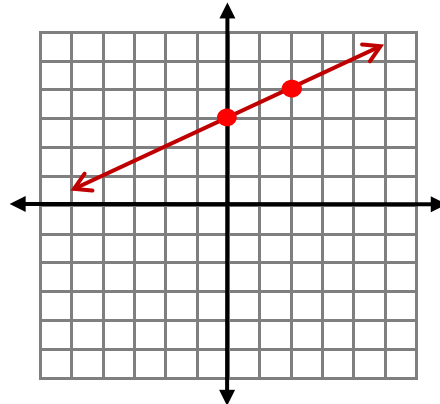
# ANSWERS

Find two points and graph the line for each equation.

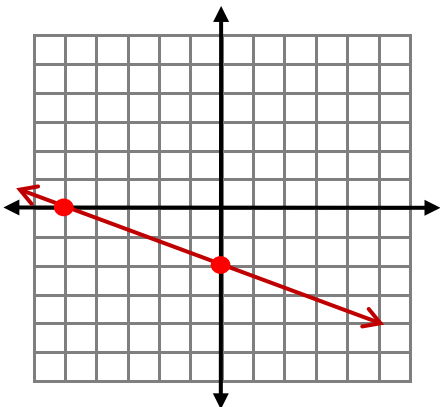
1.  $y = 6x - 4$



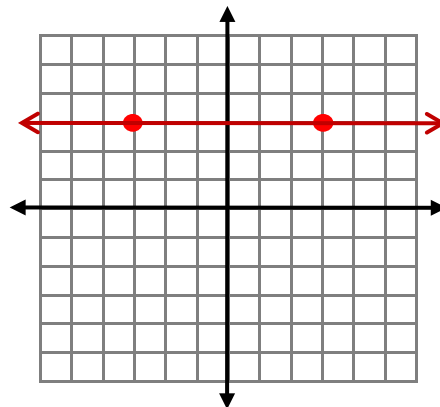
2.  $y = \frac{1}{2}x + 3$



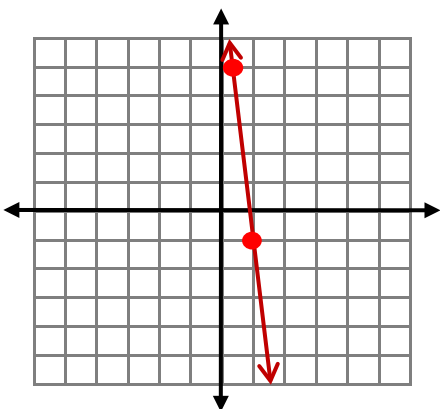
3.  $y = -\frac{2}{5}x - 2$



4.  $y = 3$



5.  $y = -9x + 8$



6.  $y = \frac{1}{4}x + 5$

