




MONEY - USA CURRENCY


ADDING and SUBTRACTING


ANSWERS





 = \$0.75
FRENCH FRIES

 = \$0.52
ICE CREAM

 = \$0.44
MILK

 = \$0.23
APPLE













 = \$0.17
COOKIE

 = \$0.58
CUP CAKE



 \$0.01  \$0.10
 \$0.05  \$0.25

Use the pictures and prices to calculate how much money Alligator Jack will have left after each purchase.

ITEMS PURCHASED	MONEY IN HIS POCKET	AMOUNT LEFT
		\$0.05
		\$0.18
		\$0.01
		\$0.29
		\$0.57
		\$0.06