

TRANSLATION

ANSWERS

Graph the original figure. Then find the new coordinates of the vertices after the given translation and graph the new translated image.

HELPFUL EXAMPLE

If given a translation in the form of an ordered pair, add the ordered pair to the coordinates of each vertex of the original figure.

Original figure vertices: $E(-3,1)$; $F(0,-2)$; $G(-4,-2)$.

Find the coordinates of its vertices if it is translated by $(4,3)$.

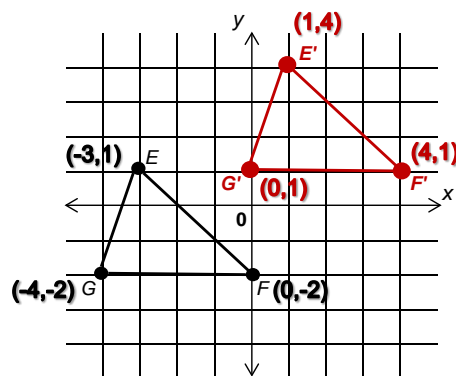
$$E(-3,1) + (4,3) \rightarrow (-3 + 4, 1 + 3) = (1,4)$$

$$F(0,-2) + (4,3) \rightarrow (0 + 4, -2 + 3) = (4,1)$$

$$G(-4,-2) + (4,3) \rightarrow (-4 + 4, -2 + 3) = (0,1)$$

The vertices of the new translated figure:

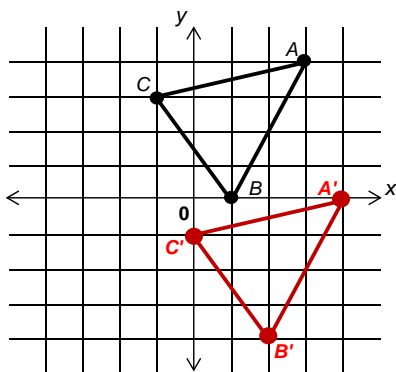
$E'(1,4)$, $F'(4,1)$, and $G'(0,1)$.



Now your turn.

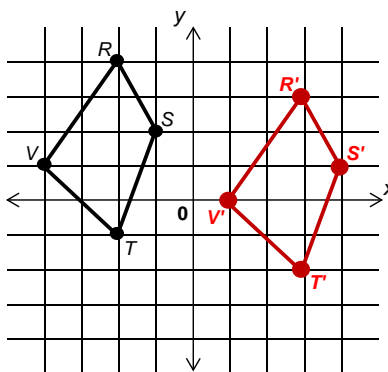
1. Polygon ABC with vertices:
 $A(3,4)$; $B(1,0)$; $C(-1,3)$

Translated by $(1,-4)$



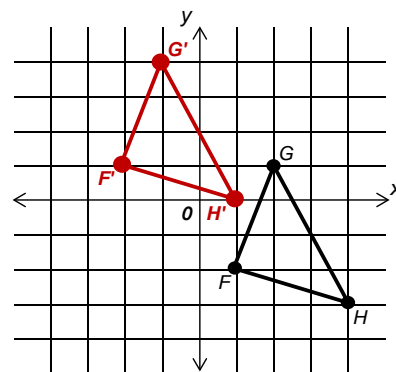
2. Polygon $RSTV$ with vertices:
 $R(-2,4)$; $S(-1,2)$; $T(-2,-1)$; $V(-4,1)$

Translated by $(5,-1)$



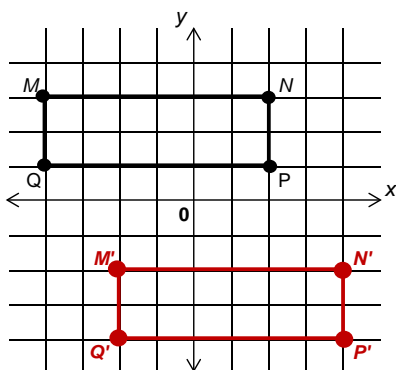
3. Polygon FGH with vertices:
 $F(1,-2)$; $G(2,1)$; $H(4,-3)$

Translated by $(-3,3)$



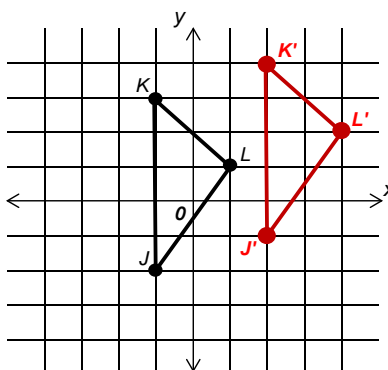
4. Polygon $MNPQ$ with vertices:
 $M(-4,3)$; $N(2,3)$; $P(2,1)$; $Q(-4,1)$

Translated by $(2,-5)$



5. Polygon JKL with vertices:
 $J(-1,-2)$; $K(-1,3)$; $L(1,1)$

Translated by $(3,1)$



6. Polygon CDE with vertices:
 $C(1,1)$; $D(4,3)$; $E(3,-2)$

Translated by $(-5,-2)$

